



# Global Treasure Hunt #1

Use a globe or detailed world map to follow the trail.

1. Start at the location 51°N, 0°E. What country are you in?

**U** \_\_\_\_\_ 

2. Travel south along the Prime Meridian (0°E) to 30°N. What country are you in?

 \_\_\_\_\_

3. Travel west along 30°N to 90°W. What country are you in?

\_\_\_\_\_

4. Travel south along 90°W to 15°N. What country are you in?

\_\_\_\_\_

5. Go west on 15°N to 120°E, crossing the International Date Line (IDL). What country are you in?

\_\_\_\_\_


6. Travel south along 120°E to the Antarctic Circle (66½°S). What continent are you on?

\_\_\_\_\_ 

7. Go west on the Antarctic Cir. to 30°E. Turn north at 30°E, go to 30°S. What country are you in?

\_\_\_\_\_

8. Travel west along 30°S to 60°W. What country are you in?

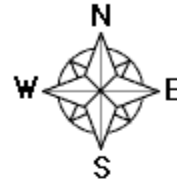
\_\_\_\_\_ 

9. Travel north along 60°W to the equator (0°N). What country are you in?

\_\_\_\_\_ 

10. Travel west for 30°. The famous place you at is called the

\_\_\_\_\_



Write the circled letters: \_\_\_\_\_

Unscramble the letters to find the mystery geography word: \_\_\_\_\_

## Global Treasure Hunt #1 Answers

Use a globe or detailed world map to follow the trail.

### Answers

1. Start at the location 51°N, 0°E. What country are you in?

U n i t e d   K i n g d o m

2. Travel south along the Prime Meridian (0°E) to 30°N. What country are you in?

A l g e r i a

3. Travel west along 30°N to 90°W. What country are you in?

U n i t e d   S t a t e s

4. Travel south along 90°W to 15°N. What country are you in?

G u a t e m a l a

5. Go west on 15°N to 120°E, crossing the International Date Line (IDL). What country are you in?

P h i l i p p i n e s

6. Travel south along 120°E to the Antarctic Circle (66½°S). What continent are you on?

A n t a r c t i c a

7. Go west on the Antarctic Cir. to 30°E. Turn north at 30°E, go to 30°S. What country are you in?

S o u t h   A f r i c a

8. Travel west along 30°S to 60°W. What country are you in?

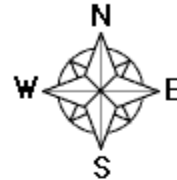
A r g e n t i n a

9. Travel north along 60°W to the equator (0°N). What country are you in?

B r a z i l

10. Travel west for 30°. The famous place you at is called the

G a l a p a g o s   I s l a n d s



Write the circled letters: o l a t l

Unscramble the letters to find the mystery geography word: a t o l l